



2015 NC 4-H Horse Program State Hippology Contest

Junior Division

March 7, 2015



Bubble in your ID number!

STUDENT ID

	0	9	2	5	9	5
0	<input type="checkbox"/> 0	<input type="checkbox"/> 0	<input type="checkbox"/> 0	<input type="checkbox"/> 0	<input type="checkbox"/> 0	<input type="checkbox"/> 0
<input type="checkbox"/> 1	<input type="checkbox"/> 1	<input type="checkbox"/> 1	<input type="checkbox"/> 1	<input type="checkbox"/> 1	<input type="checkbox"/> 1	<input type="checkbox"/> 1
<input type="checkbox"/> 2	<input type="checkbox"/> 2	2	<input type="checkbox"/> 2	<input type="checkbox"/> 2	<input type="checkbox"/> 2	<input type="checkbox"/> 2
<input type="checkbox"/> 3	<input type="checkbox"/> 3	<input type="checkbox"/> 3	<input type="checkbox"/> 3	<input type="checkbox"/> 3	<input type="checkbox"/> 3	<input type="checkbox"/> 3
<input type="checkbox"/> 4	<input type="checkbox"/> 4	<input type="checkbox"/> 4	<input type="checkbox"/> 4	<input type="checkbox"/> 4	<input type="checkbox"/> 4	<input type="checkbox"/> 4
<input type="checkbox"/> 5	<input type="checkbox"/> 5	<input type="checkbox"/> 5	5	<input type="checkbox"/> 5	5	<input type="checkbox"/> 5
<input type="checkbox"/> 6	<input type="checkbox"/> 6	<input type="checkbox"/> 6	<input type="checkbox"/> 6	<input type="checkbox"/> 6	<input type="checkbox"/> 6	<input type="checkbox"/> 6
<input type="checkbox"/> 7	<input type="checkbox"/> 7	<input type="checkbox"/> 7	<input type="checkbox"/> 7	<input type="checkbox"/> 7	<input type="checkbox"/> 7	<input type="checkbox"/> 7
<input type="checkbox"/> 8	<input type="checkbox"/> 8	<input type="checkbox"/> 8	<input type="checkbox"/> 8	<input type="checkbox"/> 8	<input type="checkbox"/> 8	<input type="checkbox"/> 8
<input type="checkbox"/> 9	9	<input type="checkbox"/> 9	<input type="checkbox"/> 9	9	<input type="checkbox"/> 9	<input type="checkbox"/> 9

Key K Verify V Rescore R

(T) (F)

1 A B C D E

2 A B C D E



1. What breed is this horse?

- A. Arabian
- B. Morgan
- C. Quarter Horse
- D. Paso Fino



2. What feed is pictured?

- A. Beet pulp
- B. Oats
- C. Milo
- D. Corn



3. What kind of saddle is pictured?

- A. All-purpose saddle
- B. Close contact saddle
- C. Dressage saddle
- D. Endurance saddle



4. What event is pictured?

- A. Gymkhana
- B. Polo
- C. Reining
- D. Horseball



5. What part of the saddle is the arrow pointing to?

- A. Pommel
- B. Cantle
- C. Flap
- D. Twist



6. For what purpose would this piece of equipment be used?

- A. Riding
- B. Grooming
- C. Trailering
- D. Driving



7. What disease does this parasite cause?

- A. Lyme disease
- B. Equine infectious anemia
- C. Founder
- D. Influenza



8. What part of the leg is the arrow pointing to?

- A. Hock
- B. Fetlock
- C. Pastern
- D. Coronet



9. What training is this horse exhibiting?

- A. Ground tying
- B. Indian broke
- C. Positive reinforcement
- D. Ground driving



10. What coat pattern does this horse exhibit?

- A. Overo
- B. Tobiano
- C. Tovero
- D. Leopard




11. What breed of horse performs maneuvers such as the one below?

- A. Akhal Teke
- B. Peruvian Paso
- C. Andalusian
- D. Lipizzan



12. What piece of the harness is the arrow pointing to?

- A. Breeching
- B. Shaft
- C. Trace
- D. Bearing rein



13. Name this piece of equipment.

- A. Speculum
- B. Muzzle
- C. Twitch
- D. Cribbing collar



14. Name the noseband the horse is wearing.

- A. Flash
- B. Figure-8
- C. Australian checker
- D. Cavesson



15. Name the face marking pictured.

- A. Bald face
- B. Apron
- C. Blaze
- D. Medicine hat



16. What event are these horses performing?

- A. Cutting
- B. Reining
- C. Steer wrestling
- D. Heading and heeling



17. What country did this horse originate in?

- A. England
- B. France
- C. United States of America
- D. Scotland



18. What part of the jump is the arrow pointing to?

- A. Rail
- B. Post
- C. Standard
- D. Stand

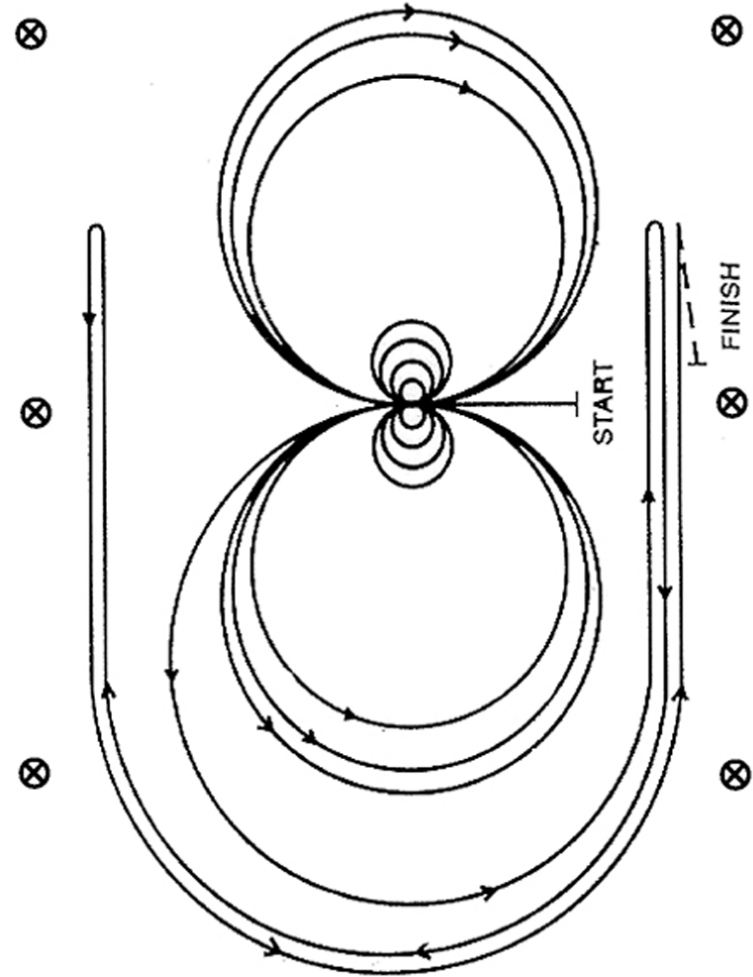


© 2010 Randi Muster/ Mustphoto, Inc.



19. This pattern would be used for what kind of competition?

- A. Cutting
- B. Reining
- C. Barrel racing
- D. Trail



20. Name this horse whose stride length was known to be 29 feet.

- A. Affirmed
- B. Seattle Slew
- C. Secretariat
- D. Whirlaway



21. What body condition score would you give this horse?

- A. 1
- B. 5
- C. 7
- D. 9



22. What breed of horse participates in this event?

- A. Arabian
- B. Thoroughbred
- C. Quarter Horse
- D. Friesian



23. What part of the horse is the arrow pointing to?

- A. Loin
- B. Croup
- C. Back
- D. Hip




24. What kind of bit is pictured?

- A. Tom thumb
- B. Kimberwick
- C. Snaffle
- D. Walking horse bit



25. What bone is the arrow pointing to?

- A. Femur
- B. Pelvis
- C. Scapula
- D. Sternum



Answer Key

1. B
2. D
3. C
4. B
5. A
6. C
7. A
8. B
9. A
10. A
11. D
12. C
13. D
14. B
15. C
16. C
17. D
18. C
19. B
20. C
21. B
22. B
23. A
24. A
25. A